

Getallen t/m 10

De oefeningen in dit werkboekje gaan over:

- Getallenrij
- Splitsen
- + en – sommen tot 10



Werken aan Rekenen

www.werkenaanrekenen.nl



Maak de getallenrij af.
Schrijf jouw antwoord op.

2	3	4	5
---	---	---	---

5			
---	--	--	--

		3	
--	--	---	--

			9
--	--	--	---

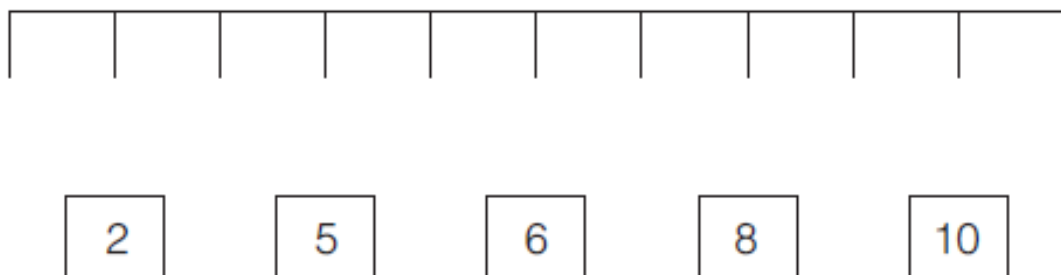
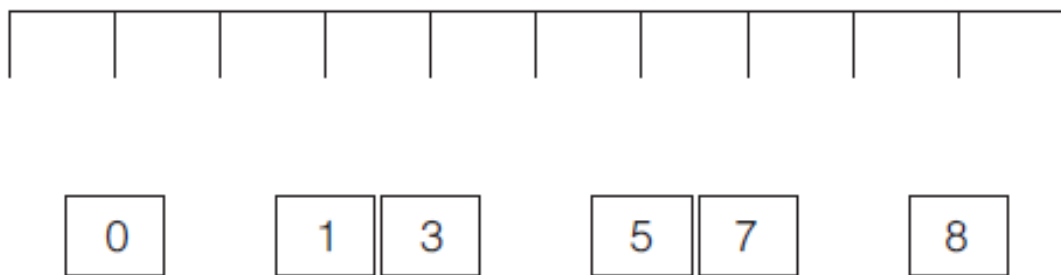
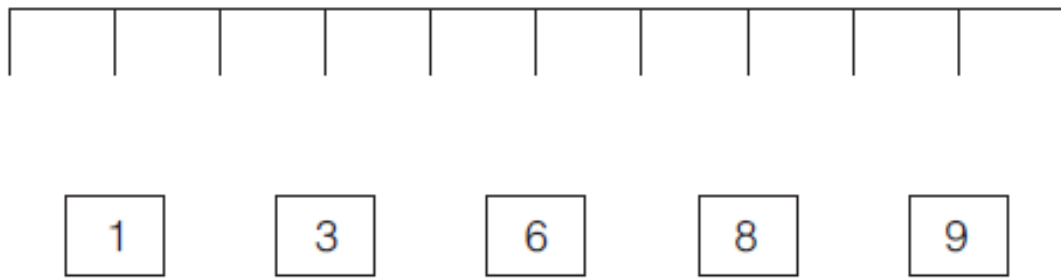
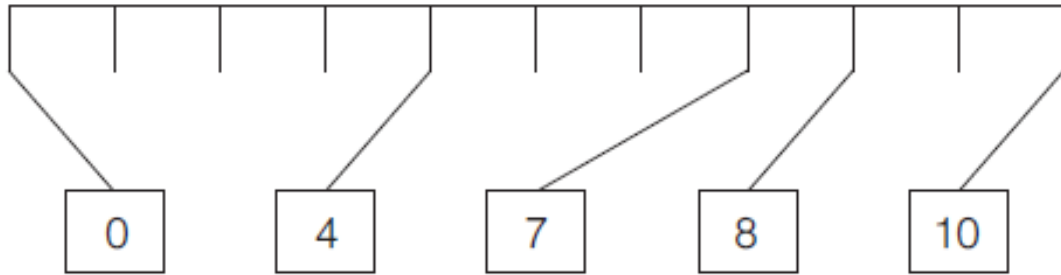
	4		
--	---	--	--

		9	
--	--	---	--

			7
--	--	--	---



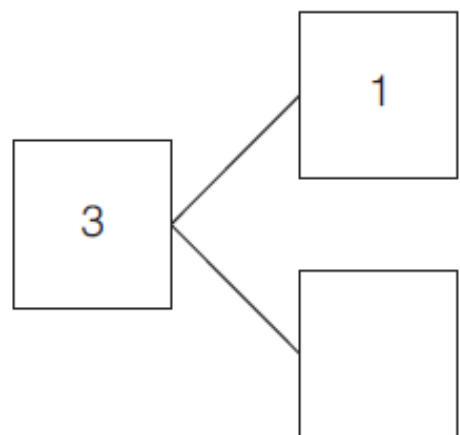
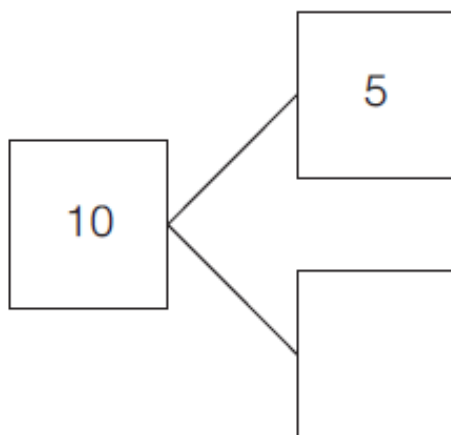
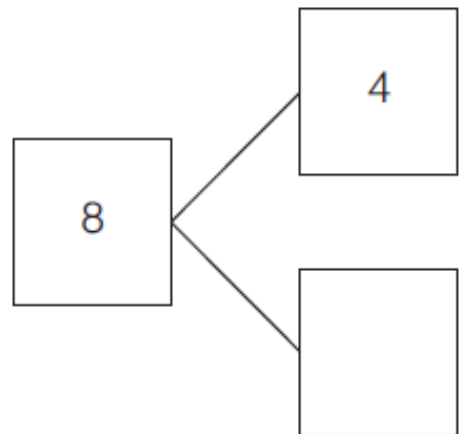
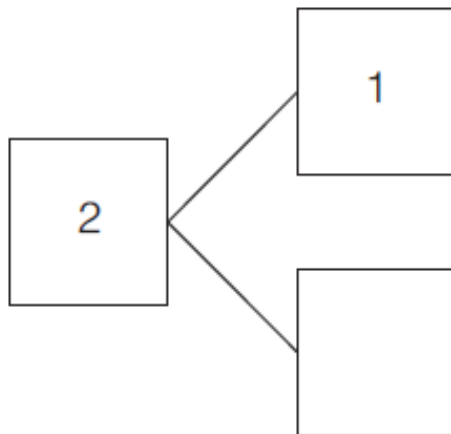
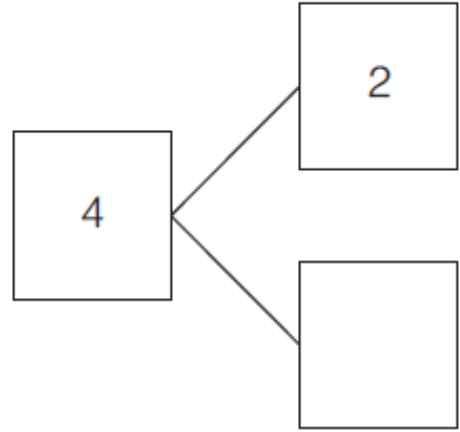
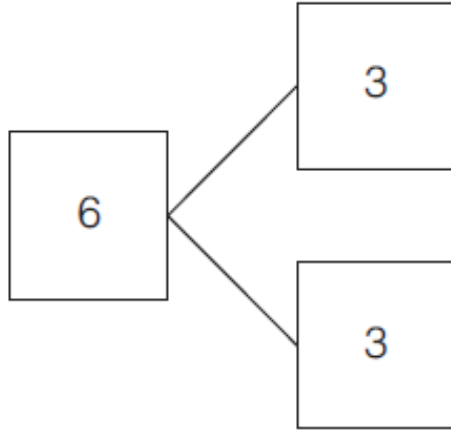
Waar hoort het getal op de getallenlijn?
Zet een streep tussen het getal en de getallenlijn.

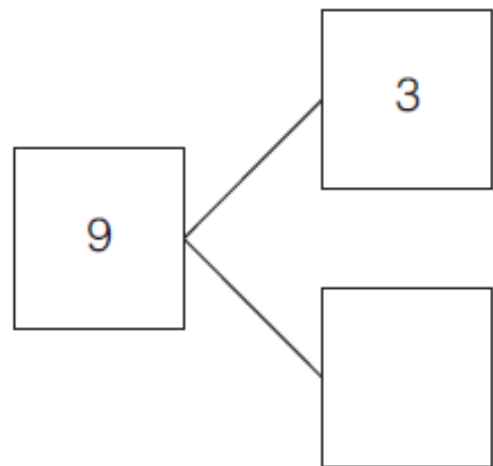
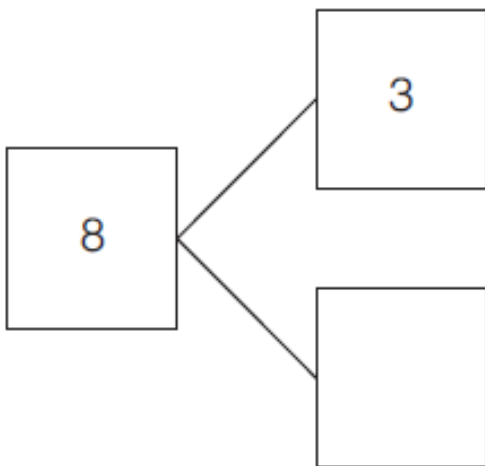
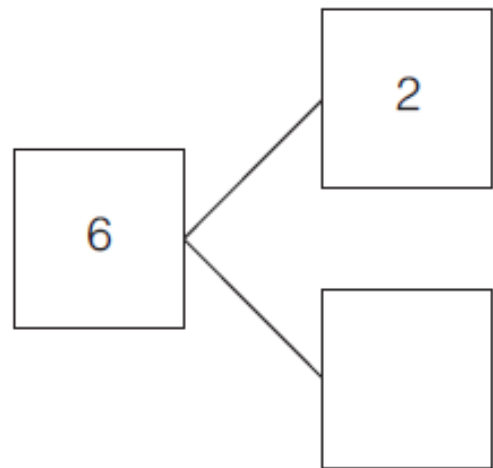
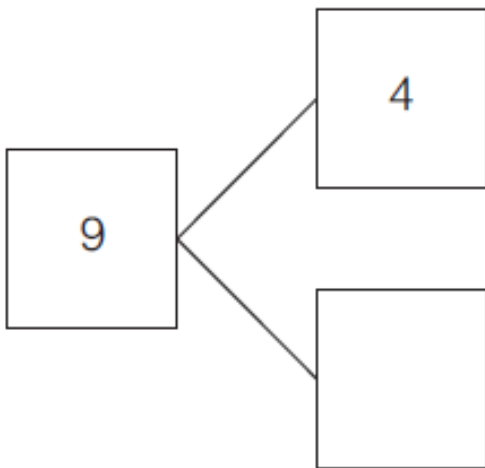
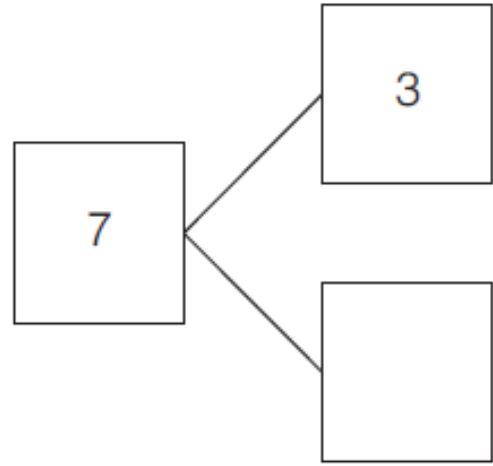
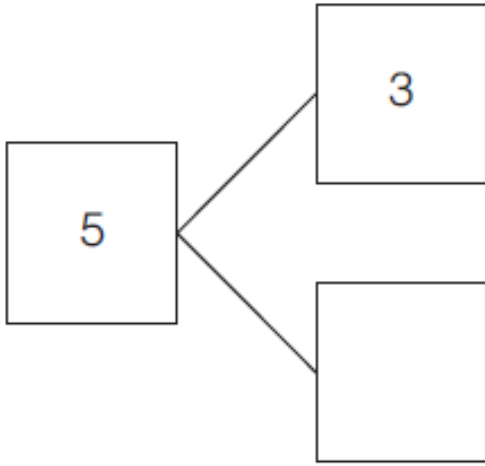


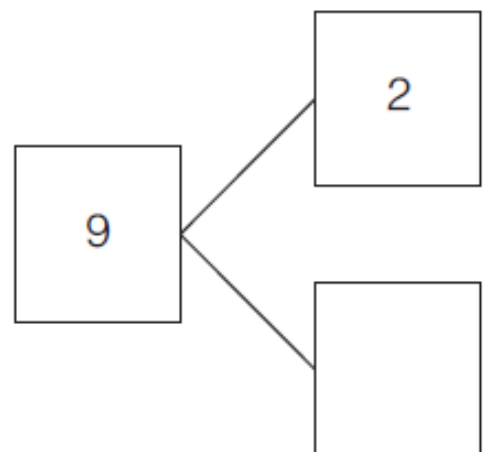
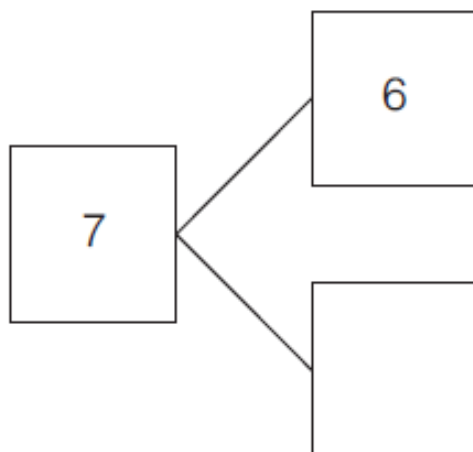
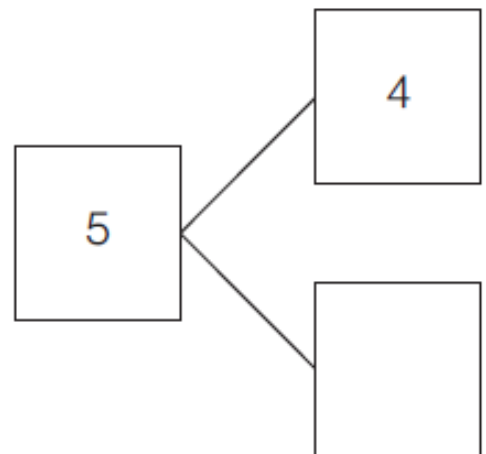
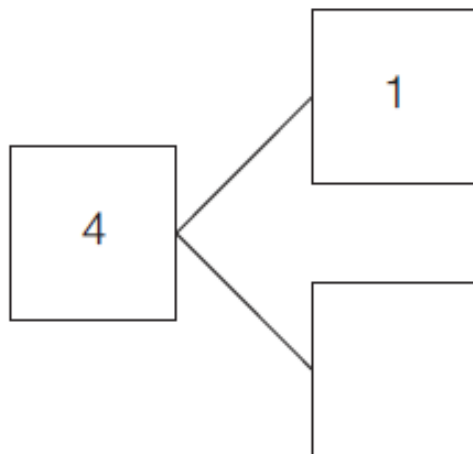
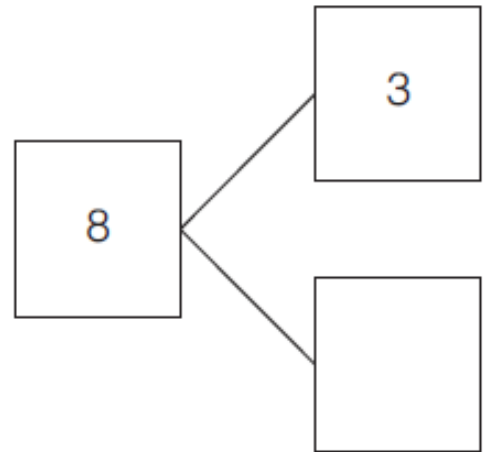
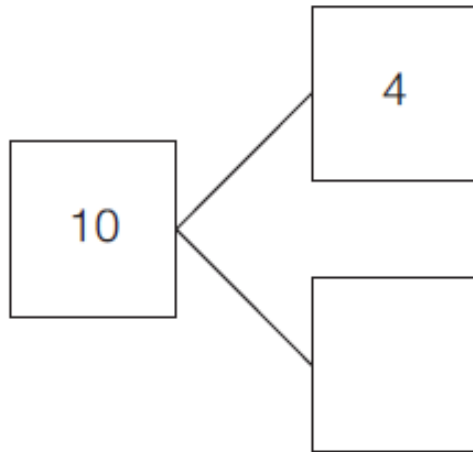


1. Splits het getal

Schrijf jouw antwoord op.









2. Splitsen op meerdere manieren

Schrijf jouw antwoord op.

2	
1	1
2	0

3	
1	
	3
2	
	1
3	
	2

4	
2	
	3
	2
4	
	1
3	
	4
1	

5	
1	
	2
4	
	5
	4
3	
	1
5	
	2
3	

6	
4	
	1
6	
	5
3	
	4
2	
	6
	2
1	
5	
	3

7	
5	
3	
	7
6	
	4
1	
	5
	3
5	
	7
	6
4	
	1
2	

1A**1P****1F****Werken aan Rekenen**

8	
7	
	2
4	
5	
	8
1	
3	
	6
5	
	7
	4
8	
	3
	2
	1
6	

9	
5	
7	
	9
1	
	4
2	
	1
6	
	3
	5
1	
	4
8	
4	
	2
3	
	7
8	
	9

10	
5	
	3
	8
	1
	2
10	
	4
	1
	6
3	
10	
9	
	5
6	
7	
	9
2	
6	
8	
	7



Kleur de 2 vakjes die samen ... zijn.

10

9	8	1	3
---	---	---	---

8

1	2	8	7
---	---	---	---

7

6	3	4	5
---	---	---	---

5

5	1	3	2
---	---	---	---

4

4	1	2	3
---	---	---	---

9

6	4	8	3
---	---	---	---

10

3	6	4	8
---	---	---	---

9

7	2	6	8
---	---	---	---

1A**1P****1F****Werken aan Rekenen**

6

1	2	4	3
---	---	---	---

4

4	3	1	2
---	---	---	---

2

4	1	0	1
---	---	---	---

4

3	1	2	4
---	---	---	---

7

6	7	1	5
---	---	---	---

8

3	6	5	7
---	---	---	---

9

2	1	6	8
---	---	---	---



Schrijf jouw antwoord op.

1	+	2	=	
2	+	2	=	
5	+	1	=	
4	+	1	=	
5	+	2	=	

7	+	2	=	
6	+	2	=	
9	+	1	=	
4	+	2	=	
3	+	3	=	

3	+	2	=	
4	+	4	=	
5	+	4	=	
1	+	1	=	
2	+	2	=	

6	+	2	=	
7	+	2	=	
5	+	2	=	
7	+	3	=	
4	+	3	=	

2	+	1	=	
2	+	3	=	
6	+	1	=	
1	+	4	=	
3	+	2	=	

2	+	7	=	
8	+	2	=	
1	+	8	=	
3	+	2	=	
4	+	3	=	

8	+	2	=	
4	+	5	=	
6	+	2	=	
9	+	1	=	
5	+	3	=	

7	+	1	=	
4	+	5	=	
8	+	0	=	
7	+	2	=	
2	+	1	=	

2	-	1	=	
4	-	2	=	
3	-	2	=	
4	-	2	=	
3	-	1	=	

4	-	1	=	
5	-	0	=	
6	-	2	=	
7	-	3	=	
8	-	2	=	

5	-	3	=	
8	-	4	=	
6	-	5	=	
9	-	6	=	
10	-	4	=	

7	-	6	=	
8	-	6	=	
9	-	7	=	
8	-	5	=	
7	-	5	=	

5	-	3	=	
7	-	5	=	
9	-	6	=	
4	-	3	=	
10	-	7	=	

8	-	6	=	
9	-	5	=	
6	-	4	=	
4	-	3	=	
8	-	5	=	

7	-	3	=	
9	-	4	=	
10	-	7	=	
10	-	2	=	
7	-	4	=	

9	-	5	=	
7	-	5	=	
8	-	2	=	
6	-	4	=	
7	-	2	=	

3	+	4	=	
5	+	2	=	
3	+	6	=	
5	+	3	=	
1	+	5	=	

9	-	5	=	
8	-	3	=	
9	-	5	=	
7	-	4	=	
6	-	5	=	

4	+	4	=	
3	+	2	=	
3	+	1	=	
2	+	3	=	
9	+	1	=	

8	-	5	=	
6	-	3	=	
9	-	3	=	
5	-	4	=	
6	-	2	=	

3	+	3	=	
4	+	3	=	
5	+	5	=	
2	+	4	=	
6	+	4	=	

4	-	4	=	
7	-	3	=	
8	-	3	=	
6	-	5	=	
9	-	2	=	

3	+	4	=	
6	+	4	=	
3	+	7	=	
2	+	7	=	
6	+	2	=	

2	-	1	=	
6	-	6	=	
8	-	4	=	
7	-	5	=	
9	-	6	=	